




**Model (3)**

**Science**



- The noble gases are located in ..... group.  
a) 7A                      b) 8                      c) 2B                      d) O
- Each of the following elements react with the diluted acids **except** .....  
a) Zinc                      b) Iron                      c) Carbon                      d) Magnesium
- Meteors are formed in .....  
a) Mesosphere                      b) Ionosphere                      c) Exosphere                      d) Stratosphere
- From the endangered creatures is .....  
a) Dinosaurs                      b) Quagga                      c) Dodo birds                      d) Panda
- The liquid Nitrogen is used in .....reactor  
a) saving cornea                      b) cooling of nuclear reaction  
c) manufacturing of foam boxes                      d) food saving
- Fossils are found in ..... rocks.  
a) metamorphic                      b) sedimentary                      c) volcanic                      d) igneous






## Maths

1) The mean of the values : 5 , 2 , 7 , 12 and 9 is .....

( 2 , 5 , 7 , 13 )

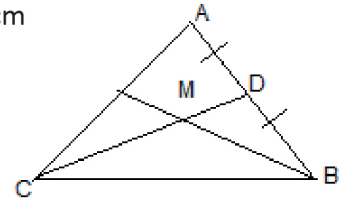


2) In the opposite figure :

M is the point of intersection of the medians of triangle ABC , CD = 12 cm

then CM = ..... cm

( 4 , 5 , 10 , 8 )



3) ABC is a triangle in which AB = 3 cm , and AC = 7 cm , then BC ∈ .....

( [ 4 , 10 ] , ] 4 , 10 [ , [ 4 , 10 [ , ] 4 , 10 [ )

4) In triangle ABC :  $m(\angle B) = 90^\circ$  ,  $m(\angle C) = 30^\circ$  and AC = 10 cm , then AB = .....cm

( 2.5 , 5 , 10 , 15 )

5) In  $\triangle XYZ$  If  $m(\angle X) = 50^\circ$  , and  $m(\angle Y) = 60^\circ$  , then XY .....YZ

( > , < , = , twice )

6) The volume of sphere whose diameter length is 6 cm = .....  $\text{cm}^3$

(  $288$  ,  $12\pi$  ,  $36\pi$  ,  $288\pi$  )

7)  $[2, 5] - \{2\} = \dots\dots\dots$

(  $]2, 5[$  ,  $]2, 5]$  ,  $\{5\}$  ,  $\{7\}$  )

8 ) If the straight line passes through the two points ( 2 , k ) and ( 4 , 7 ) is parallel to the x-axis ,

then k = .....

( 5 , 4 , 7 , 1 )